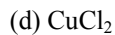
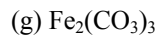
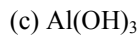
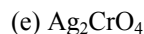


Name: \_\_\_\_\_

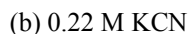
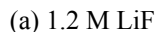
Period: \_\_\_\_\_

**Dissociation**

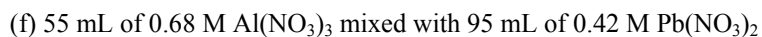
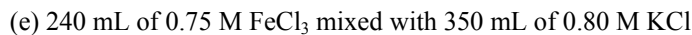
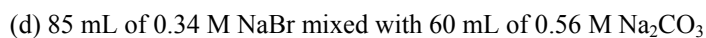
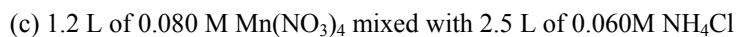
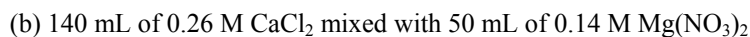
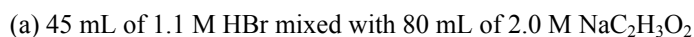
(1) Write dissociation equations for the following compounds.



(2) Write dissociation equations for the following compounds. Calculate the concentration of each ion in solution.



(3) Calculate the concentration of each ion resulting from mixing the following solutions, given that no reaction occurs.



Answers:

